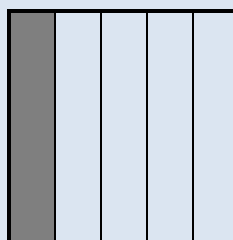
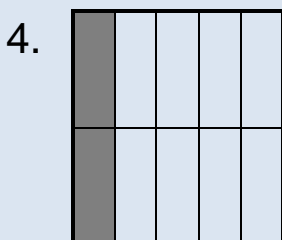
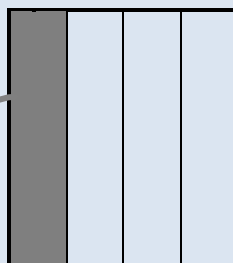
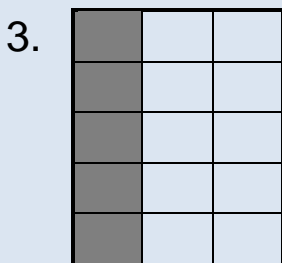
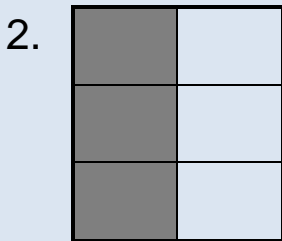

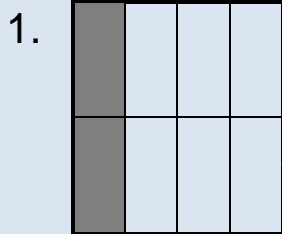


FDP1 -31

Name: _____

Connect equivalent fractions, then cancel down.

Diagrams help the student to recognise fractions as part of a shape.



5. $\frac{2}{8} = \frac{1}{\square}$

6. $\frac{3}{6} = \frac{1}{\square}$

7. $\frac{5}{15} = \frac{1}{\square}$

8. $\frac{2}{10} = \frac{1}{\square}$